
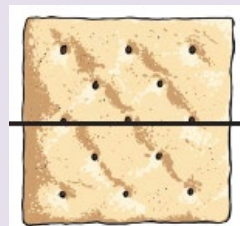


half




These objects are split in **half**.

Each **whole** has **2 equal parts**.




quarter




These objects are split into **quarters**.

Each **whole** has **4 equal parts**.

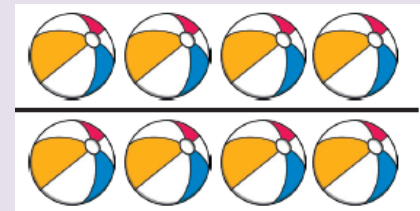


half of a group



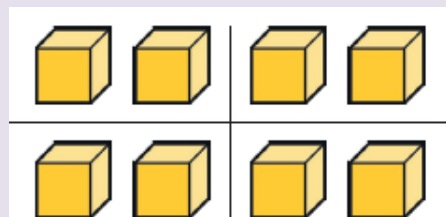
There are 4 spots.
Split into **2 equal groups**
Half of 4 is 2

half full



There are 8 balls.
Half of 8 is 4

quarter of a group



one quarter full



There are 8 blocks.
Split into **4 equal groups**
There are 2 blocks in each quarter.
One quarter of 8 is 2